





Fluency

Add the dots to find the answer.

1  +  =



2  +  =

3  +  =

4  +  =

Word Problem

- 5 If you would have 4 goldfish and two octopuses in an aquarium, How many would you have in total?





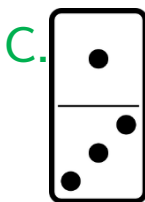
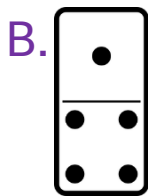
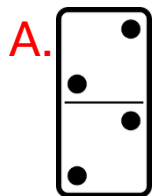
+ =

- 6 Zoe saw three pink fairies and 2 blue fairies. How many fairies did Zoe see altogether?



Reasoning

- 7 Circle the odd one out.



I scored out of 7