

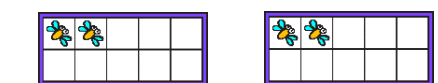
Fluency



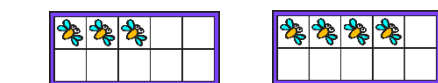
1 $5 + 3 =$



2 $7 + 2 =$




3 $2 + 2 =$



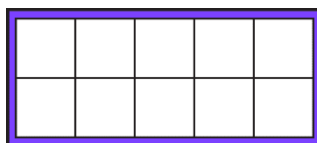
4 $3 + 4 =$

Word Problem

- 5 Jane had 7 apples in a basket. She put two more apples. How many apples does she have in total?



- 6 Jim has 5 marbles. Ben has 4 marbles. How many marbles do they have altogether? Show the calculation on the tens frame and write the answer.



Reasoning

- 7 Jim says, There are 6 eggs in both plates.



Who is correct? Explain why.

- Sara says, There are 8 eggs in both plates.

