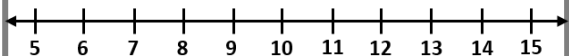
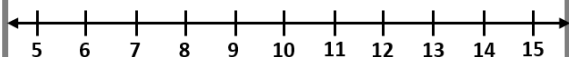


Fluency

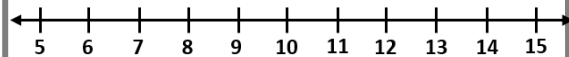
1 Start at 5 and count on 7



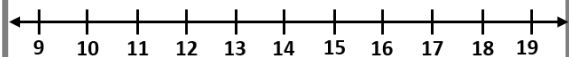
2 Start at 6 and count on 6



3 Start at 8 and count on 5



4 Start at 9 and count on 6



Word Problem

5 Join the number sentences that have the same answer. The first one has been done for you.

$4 + 9$

$6 + 9$





$10 + 5$

$9 + 6$

$11 + 4$

$5 + 8$

6 Mia has 2 boxes of cards. She has 13 cards in total. Tick the two boxes that she has.



Reasoning

7 Circle the odd one out.

A. $5 + 10$

