


Fluency

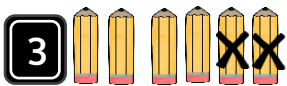
Complete the number sentences using the pictures given below.



$$3 - 2 =$$



$$4 - 1 =$$



$$6 - 2 =$$



$$5 - 3 =$$

Word Problem


- 5 Jane had 7 slices of pizza. She sold 5 slices.

How many slices of pizza are left?





- 6 Sam had 7 apples in a basket. His friend ate 4 apples.

How many apples are left in the basket?



Reasoning

- 7 The two numbers have a difference of 5. The larger number is less than 10. What number could it be? Show your answer.



I scored out of 7