





## Fluency

Write  $<$ ,  $>$  or  $=$  to complete the number sentences.

1  $10 - 10$    $10 - 4$

2  $6 - 3$    $9 - 8$

3  $4 - 2$    $5 - 1$

4  $10 - 5$    $7 - 2$

## Word Problem

- 5 Jacob has ten story books.  
Kinza has six story books.  
How many fewer books does Kinza have than Jacob?





- 6 Jane has these colouring pencils. Ben has two less than Jane.  
Find the difference between Jane and Ben's colouring pencils?



## Reasoning

- 7 The difference of two numbers is 3.  
The larger number is less than 8.  
What could the two numbers be?



I scored  out of 7