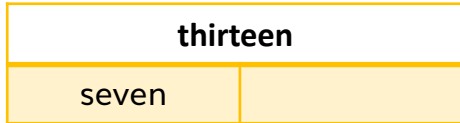


Fluency

Complete the bar model by counting backwards.

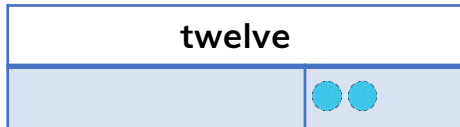
1



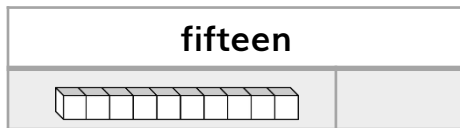
2



3



4



Word Problem


5

John has 14 cupcakes. Ava has 2. John gives Ava 9 cupcakes. Who has the most cupcakes now?



6

Ben has 15 crayons. 7 crayons are green. The rest are orange. How many crayons are orange?



Reasoning



7

Dora is calculating $15 - 9$. She has done this calculation

$$15 - 5 = 10$$

$$10 - 4 = 6$$

Is she correct? Justify.



I scored out of 7