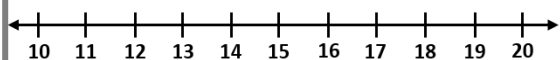


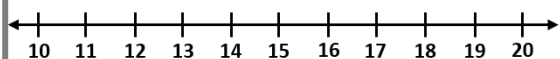
Fluency

Complete the calculations using the number lines below.

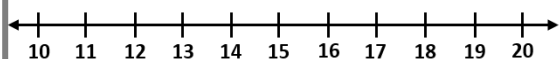
1 $20 - 8 = \underline{\quad}$



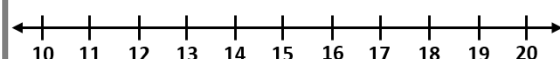
2 $20 - 7 = \underline{\quad}$



3 $20 - 10 = \underline{\quad}$



4 $20 - 5 = \underline{\quad}$



Word Problem

- 5 Jane had 16 jelly beans in a jar. She ate four jelly beans. How many jelly beans are left in the jar?



- 6 Choose the correct digit card to make the number sentences correct.

$20 - 15 < 13 - \underline{\quad}$

$17 - 9 = \underline{\quad} - 1$

$19 - \underline{\quad} > 17 - 7$

5

7

9

Reasoning

- 7 Sofia is finding the part in the part whole model using subtraction.



I can find the answer by calculating $17 - 9 = 8$

Is Sofia correct? Justify your answer.

