

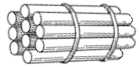
Fluency

Match each calculation to its answer.

1 $15 - 5$

13

2 $19 - 15$



3 $20 - 7$

9


4 $20 - 11$



Word Problem

- 5 Ria has 14 blocks.
She gives half of the blocks to her friend Amy

How many blocks are left?



- 6 Sara is subtracting two numbers that gives the answer 9.
She know that the 1st number is 20. Can you help her spot the 2nd number?

$20 - \square = 9$



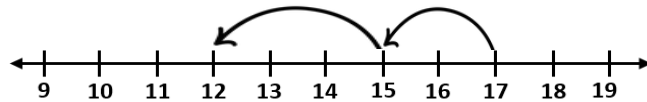
Reasoning

- 7 Zoe and Huma are finding the answer of $17 - 5$


Huma:

17	
5	12

Zoe:



What is the same? what is different?



I scored out of 7