


Fluency

1 Count in 2s and complete the grid.


0	1		3
	5		7
	9		11
	13		15
	17		19
	21		23
	25		27
	29		31

Word Problem

6 A monster has two eyes. How many eyes would three monsters have?



7 Count the money and write the answer.


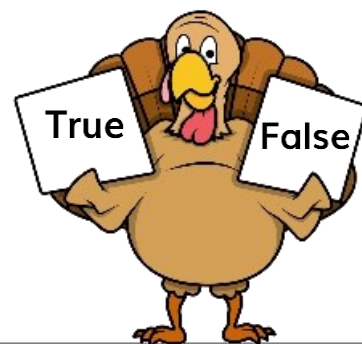


Reasoning

8 True or false?

When counting in 2s from 0, all the numbers are even.

How do you know?



I scored out of 8