

## Fluency

- 1 Fill in the missing numbers.
- a) 0, 5, 10, \_\_\_\_, 20, \_\_\_\_
- b) 5, \_\_\_\_, 15, 20, \_\_\_\_
- c) 30, \_\_\_\_, 20, \_\_\_\_, 10
- d) 15, \_\_\_\_, 25, \_\_\_\_, 35, 40
- e) 20, \_\_\_\_, 10, \_\_\_\_, 0
- f) 25, \_\_\_\_, 35, \_\_\_\_, \_\_\_\_


## Word Problem

- 6 There are 5 eggs on a leaf. How many eggs are there on 3 leaves?

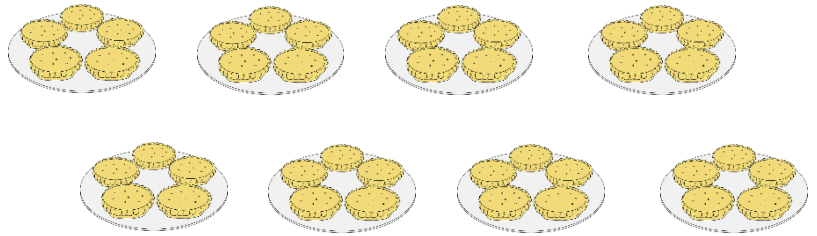
There are \_\_\_\_ eggs on a leaf.

There are \_\_\_\_ leaves.

There are \_\_\_\_ eggs in total.



- 7 Circle 30 cookies.



## Reasoning

- 8 Zoe says, Mr Frog did jumps of 2s.


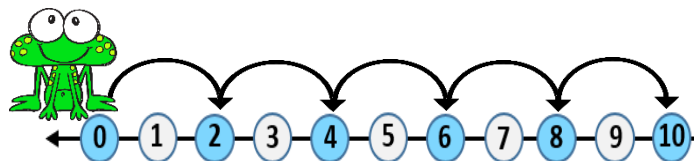


Tom says,

No! Mr Frog did jumps of 1s.



Who is correct? Explain why.



I scored  out of 8