

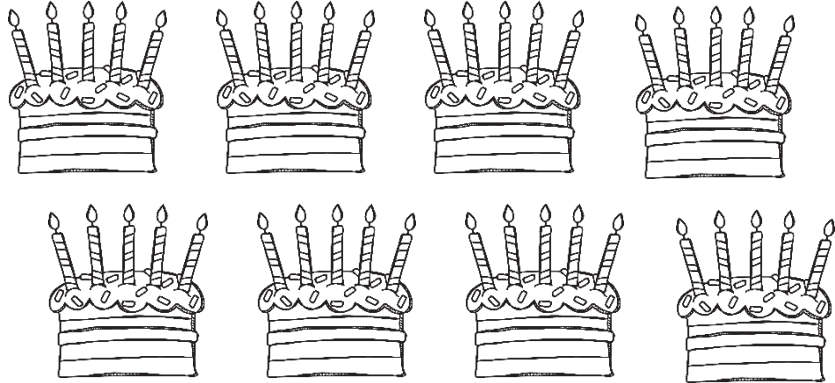
Fluency

1 Count in 5s and complete the grid.

1	2	3	4	
6	7	8	9	
11	12	13	14	
16	17	18	19	
21	22	23	24	
26	27	28	29	
31	32	33	34	
36	37	38	39	
41	42	43	44	
46	47	48	49	
51	52	53	54	
56	57	58	59	

Word Problem

6 Colour in 25 candles.



7 Count the money and write the answer.


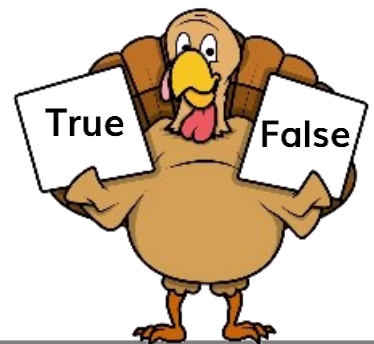


Reasoning

8 True or false?

When counting in 5s from 0, the ones digit will always be 0 or 5.

How do you know?



I scored out of 8