

Fluency

Write 10 more and 10 less than the given numbers.

1

10 less		10 more
	30	

2

10 less		10 more
	20	

3

10 less		10 more
	50	

4


10 less		10 more
	70	

Word Problem

- 6 One basket contains 10 Easter eggs. Ben needs to put 70 Easter eggs. How many baskets does he need?

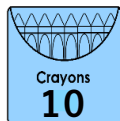
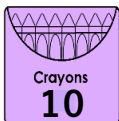
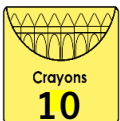


- 7 Ali had 20 apples in a basket. He gave away 10 apples. How many apples are left in the basket?



Reasoning

- 8 Sam has these crayons.



He needs 80 crayons for his classroom. Does Sam have enough crayons? How do you know?

