





Fluency

- 1 Draw a line to cut the shape in half.



Word Problem

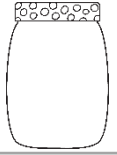
- 6 Read the label and colour each picture accordingly.



Half


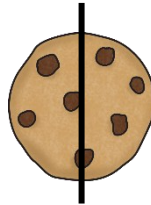


More than half




Less than half

- 7 Circle the objects that have been split into equal halves?



Reasoning


- 8 Jim says, I have split my watermelon in two equal parts.



- Sara says, I have split my apple into two halves,



Who is correct? Explain why.



I scored out of 8