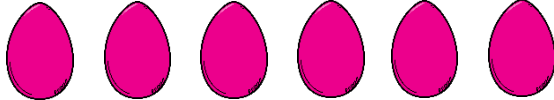



Fluency


1 Circle half of the amounts in each set.



Word Problem

6 Look at the picture and complete the sentence below.

- There are _____ apples on the tree.
- The half of _____ apples is _____.



7 Share the candies between 2 children.



How many does each child get?

Reasoning

8 Kim said that he has halved the fruits correctly.


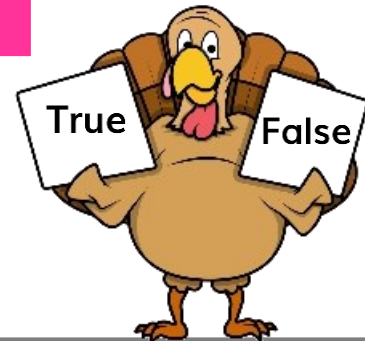


6 fruits



8 fruits

True or False? Explain your answer.



I scored out of 8