

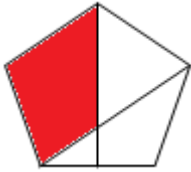
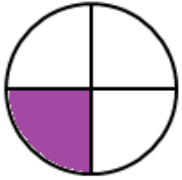


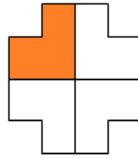
Fluency

1 Tick the shapes that show quarters.




Word Problem

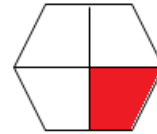
6 Look at the shapes. Sort them into the table given below.



A



B



C




D



E

| Half | Quarter |
|------|---------|
| | |

7 Look at the pizzas below. How many quarters do we have in total?

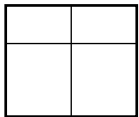


Reasoning

8 Ben says,
 My shapes show quarters as it has two lines across the shape.



Who is correct? Explain why.



Anna says,
 My shape shows quarters as all four parts are equal.

