



## Fluency

- 1 Cross one quarter of the amounts in each set.



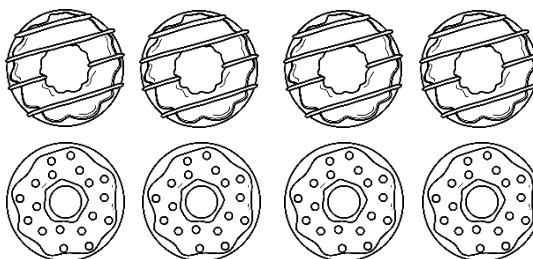
## Word Problem

- 6 Look at the cupcakes below and complete the sentences.



- There are \_\_\_\_\_ cupcakes.
- There is \_\_\_\_\_ cupcakes in a quarter.
- A quarter of \_\_\_\_\_ is \_\_\_\_\_.

- 7 Colour  $\frac{1}{4}$  of the donuts below.



## Reasoning

- 8 What is same? What is different?

