

Fluency

Colour one quarter of the boxes.

1

2

3

4

Word Problem

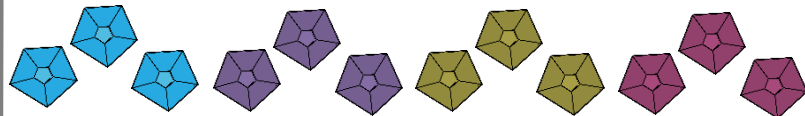
6 Jay has this much money.



He wants to put a quarter of the money in his savings.




How much money will he put in his savings?

7 Sara wants to share these gems equally between her 4 friends. Can you help Sara and draw circles to share these gems into four equal groups?




Reasoning

8 Circle the odd one out.



Explain your answer.



I scored out of 8