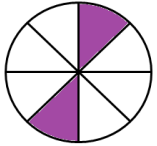


## Fluency

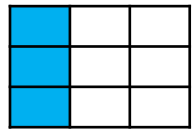
- 1 Match the pictures with the correct label.



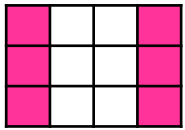
Whole



Half



Quarter

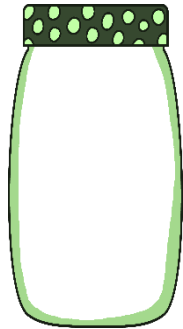
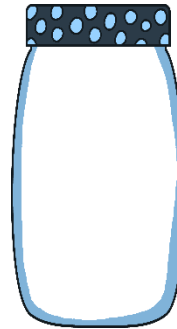
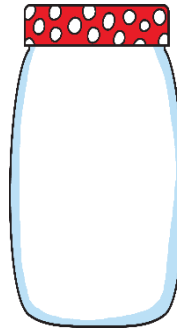


## Word Problem

- 6 Jane is thinking of a number. The quarter of her number is 2.

What number is Jane thinking of?

- 7 Rida has 20 jelly beans. She wants to share them into  $\frac{1}{4}$ s. Draw them in the jars below.



## Reasoning

- 8 Tim says that 4 quarters are always made up of 4 equal parts.

True or false. Explain why.

