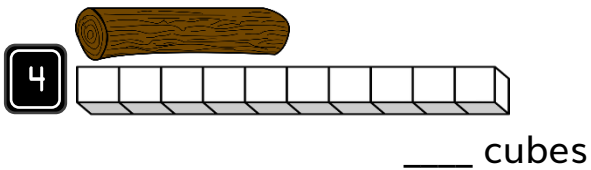
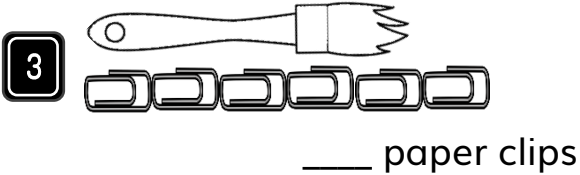
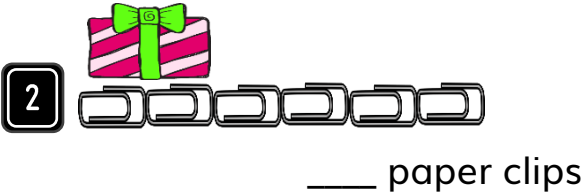
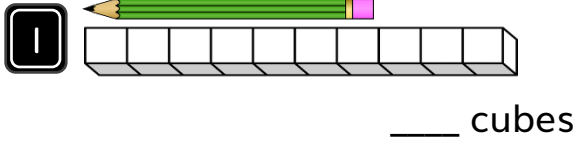



Arithmetic

How long is each object?



Reasoning


5 Sam and Laura are measuring a fish.



Who is correct? Explain your answer.

6 Measure some objects in your classroom.

Which is the longest?
Which is the shortest?



Word Problem

7 Ben measures the length of a box. It measures 10 cubes long.
What is the length of 3 boxes?

