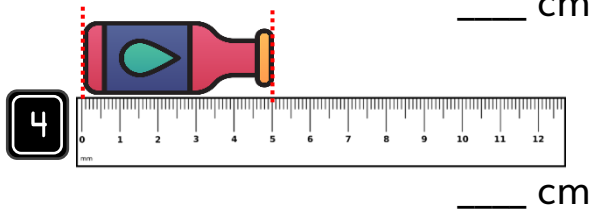
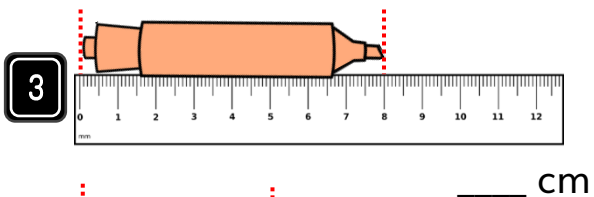
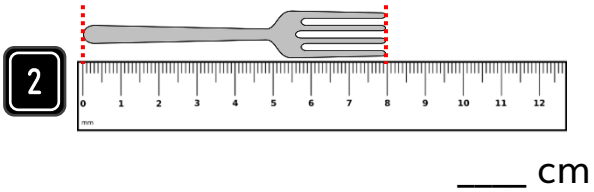
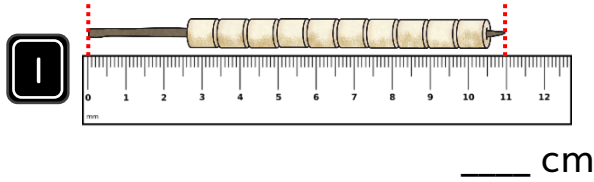


Arithmetic

How long is each object?




Reasoning

5 Laura is measuring the height of her ice-cream.






Ice cream is 11cm long

Explain her mistake.



6 Tick the statement that is correct.

- A.  B.  C. 
- ☐ A is longer than B
- ☐ C is longer than A

Word Problem

7 Jane is measuring her toy camel with her toy monkey.

How much longer is the camel than the monkey?

