



## Arithmetic

Circle the object that is heavier.


1




2



3




4



## Word problem

5

Two feathers are put on either side of the scale. How would the scale look like? Tick one.



6

The ball is heavier than the pencil. Draw the ball and the pencil on the scale.



## Reasoning

7

Sara and Ben are trying to figure out who is heavier:



Apple is heavier than the frog.



The frog is heavier than the apple.

Who is correct? Explain your answer.

