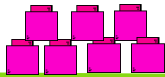


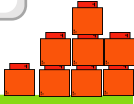
Arithmetic

How much does each object weigh?



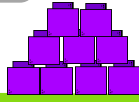
1

The box weighs cubes



2

The box weighs cubes.




3

The box weighs cubes

Word problem

4

Look at the scale. Which object weighs the same as the teddy? Circle one.



A. book 7 cubes

B. box 2 cubes

5

The cat weighs 15 cubes and the dog weighs 19 cubes. How much more does the dog weigh than the cat?



Reasoning

6

The book weighs 5 cubes. True or false?

