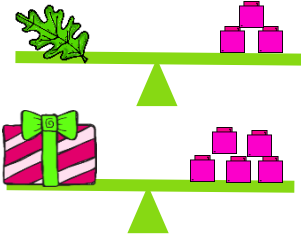


## Arithmetic

Which object is lighter. Tick one.

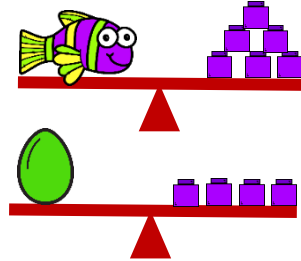
1



☐ leaf

☐ gift

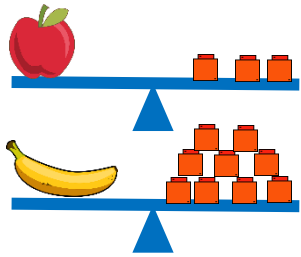
2



☐ fish

☐ egg

3



☐ apple

☐ banana

## Word problem

4

The objects are ordered from lightest to heaviest. Choose three items to complete the statement below.



The \_\_\_\_\_ is heavier than \_\_\_\_\_ but lighter than \_\_\_\_\_.

5

## Reasoning

6

The objects are arranged from heaviest to lightest.



Ava wants an object that is heavier than the fish. Which item should she choose and why?

