


## Arithmetic

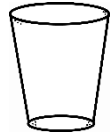
Colour the glasses to match their label.

1




full

2



half full

3



empty

4



nearly empty

## Reasoning

5

Jim says,



My cup is half full.



Do you agree? Explain why.

6

Always, sometimes or never? Explain.

Two identical containers have same capacity.

## Word Problem

7 Jane wants a glass that has the most milk in it.

A.



B.



C.



Which glass should she choose?

