


Arithmetic

Compare real life objects. Circle that holds more.

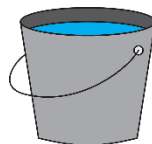
1



2



3



4



Reasoning

5 Jane says,



The soda bottle has capacity of six glasses.



Is Jane correct? Explain her mistake.

6 Tick the correct statement below.


☐

A hold less than B

☐

C holds more than B

Word Problem

7 Jim, Jane and Joe are describing how much milk they have in their glasses.



My bottle has more milk than Jim's bottle.

Jane



My bottle is nearly empty

Jim




My bottle has less than Jim's.

Joe

Can you colour the glasses with the amount of milk each glass could have?

Jane:



Jim:



Joe:

