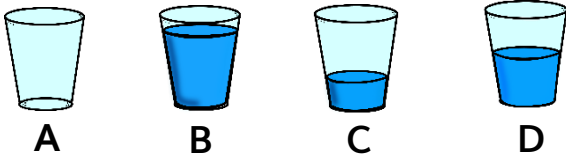



Arithmetic



- 1 Glass _____ has more water than glass C but less water than glass B.
- 2 Glass _____ has the least volume of water.
- 3 Glass _____ has the largest volume of water.
- 4 Glass _____ has half the volume of water than B.

Reasoning

- 5 True or false?




- 6 Always, sometimes or never.

Two identical fish tanks have same capacity.

Word Problem

- 7 7 jugs of water fill a bath tub.



How many jugs of water will fill 2 bath tubs?

