


Fluency

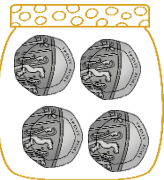
1 Match each jar to its amounts.



80p



21p




55p



£2

Word Problem

2 Make 20p in as many different ways as you can using these coins.



3 Amy wants to buy an ice-cream. The ice-cream cost 10p. Which coins can Amy use to pay for the ice-cream?




Reasoning

4 Kinza says,



The fairy gave me a coin that is bigger than 10p and smaller than 50p.

Which is the value of the coin? Convince me.



I scored out of 4