



Arithmetic

1 Write down the value of each note.









Word Problem

2 How many of each note you can see in the purse.



_____ 20 pound notes.

_____ 10 pound notes.



_____ 5 pound notes.

3 Sara gave just one note to pay 20 pound for buying a school bag. Which note did she give to shopkeeper. Tick the note.



Reasoning

4 What is same? What is different?



I scored out of 4