








Fluency

- 1 Count the objects in each set and then match them with the set that has equal objects.



Word Problem


- 2 How many eyes are there?



There are _____ groups of _____ eyes.

There are _____ eyes in total.

- 3 Jill wants to make equal groups of these apples. Can you help make the equal groups?



There are _____ groups of _____ apples.

There are _____ apples in total.

Reasoning

- 4 Look at the groups below. Circle the odd one out.

