


Fluency

Continue drawing the equal groups.


1




2



3




4



Word Problem

- 5 Ria is arranging 20 counters into equal groups. Can you complete her drawing and then complete the sentence below.



There are _____ equal groups of _____.

- 6 Sita made 3 goody bags for her friends. She put two candies in each bag. Can you draw this as a representation?




There are _____ equal groups of _____.

There are _____ candies in total.

Reasoning

- 7 Jane says that there are four equal groups of 3 balloons.



Explain her mistake

