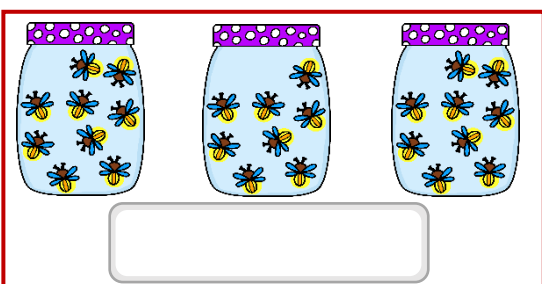
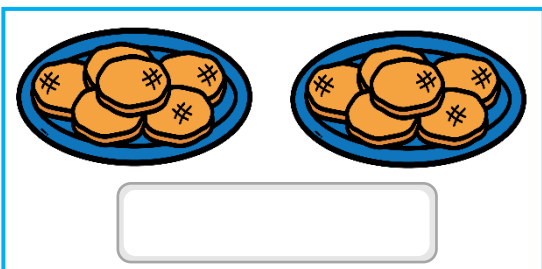



## Fluency

Look at the groups and write equal or unequal in the given space.




## Word Problem

- 5 Jane had 5 toppings on a pizza slice. How many toppings does she have on 3 slices?



- 6 There are \_\_\_\_\_ equal groups of \_\_\_\_\_. Can you group these flowers equally?



There are \_\_\_\_\_ equal groups of \_\_\_\_\_ flowers.


There are \_\_\_\_\_ flowers in total.

## Reasoning


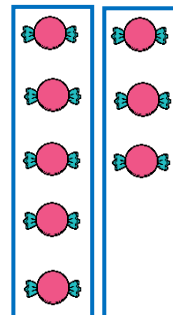
- 7 Zara and Ali each have some candies. Each of them has put their candies into two groups. What do you notice about Zara's and Ali's apples? What's the same? What's different?



Zara



Ali



I scored \_\_\_\_\_ out of 7