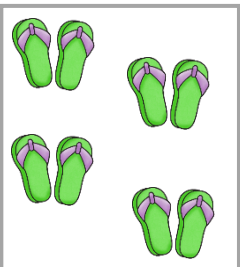



Fluency

- 1 Match the statements to the images.



$$5 + 5 + 5$$



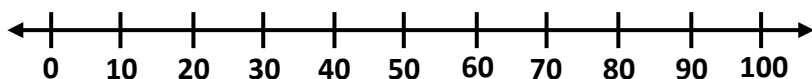
Two 3s



4 groups of 2

Word Problem

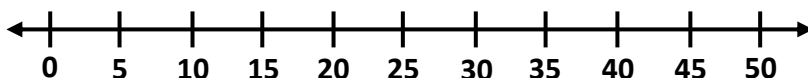
- 2 John had five 10p in his wallet. How much money does John have? Use the number line to help you.



Five 10s = _____


_____ + _____ + _____ + _____ + _____ = _____

- 3 Josh has 7 bags of apples. Each bag has 5 apples. How many apples does Josh have?




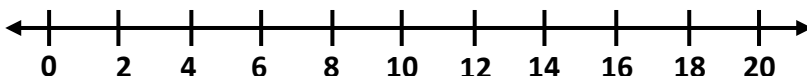
_____ groups of _____

Seven 5s = _____



Reasoning

- 4 Class 1 has 15 pencils. They need 8 groups of 2. Do they have enough pencils? How do you know?



I scored out of 7