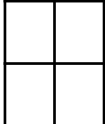
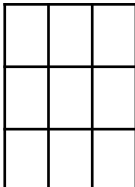
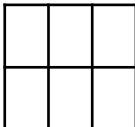



Fluency

Write how many row and columns each array has

1  Rows = ____
Columns = ____

2  Rows = ____
Columns = ____

3  Rows = ____
Columns = ____

4  Rows = ____
Columns = ____

Word Problem

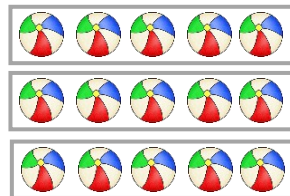
5 Complete the sentences.

There are ____ balls in each row.

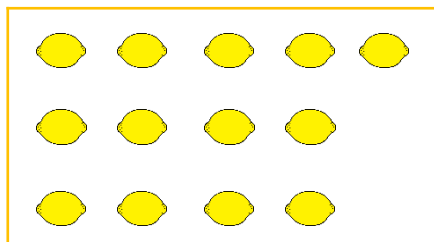
There are ____ rows.

____ + ____ + ____ = ____

There are ____ balls altogether.




6 Zoe makes an array but couldn't complete it. She has finished her first row. Can you help Zoe complete her array?




Reasoning

7 Look at both arrays. What's the same? What's different?

A.



B.



I scored out of 7