


Fluency

Draw array for each number sentence.


1 2×5



2 Three 5s



3 4×3




4 3×3



Word Problem

5 Tick the multiplication sentence that describes the picture.



☐ 4×2

☐ 3×2

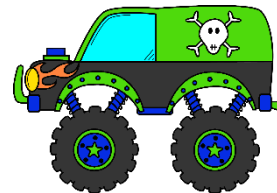
☐ 2×8

☐ 4×5

6 There are 4 monsters in one truck.
There are 5 trucks on a finish line.

How many monsters are there in total?



\times =



Reasoning

7 Mr. Bunny says that my waffle has 3 rows and 9 columns.

Is he correct? How do you know?



I scored out of 7