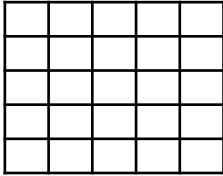


## Fluency

Colour in each arrays.


1

$2 \times 5$




2

$2 \times 3$




3

$4 \times 4$



4

$5 \times 5$




## Word Problem

5

Sam has baked these cookies. Write the multiplication sentence for the cookies.

$$\square \times \square = \square$$



6

One flower has 10 petals. Jane had 4 flowers in her garden. How many petals are there altogether?

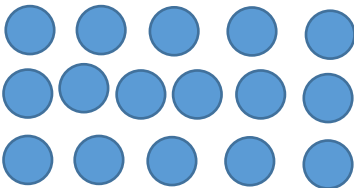
$$\square \times \square = \square$$




## Reasoning

7

Rosie is solving  $3 \times 5$ . She draws this array.



Explain her mistake.



I scored  out of 7