


Fluency

Write the calculations to go with these arrays.


1




2



3



4



Word Problem

5 Tick the multiplication sentence that describes the picture.



☐ 5×5

☐ 3×5


☐ 4×5

☐ 2×5

6 One Easter cookie has 9 spots. Ron has 2 cookies in a jar. How many spots are there altogether?

+ =

\times =



Reasoning


7 There are 5 boxes of biscuits. Each box has 2 biscuits.

Is Leo correct? Justify it.

There are 7 biscuits in total because $5 + 2 = 7$



Leo



I scored out of 7