


## Fluency


- 1 Match the objects to the turns they have made.



three-quarter turn



Full turn



Quarter turn



Half turn

## Word Problem

- 5 Look at the object below. How would it look after a half turn clockwise? Circle the correct one.



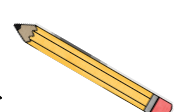

half turn clockwise



- 6 This is Sam's pencil.



Sam turns the pencil **one quarter anticlockwise** turn. Circle the picture which shows how the pencil looks after the turn



## Reasoning

- 7 Tim says, The butterfly has taken half turn anticlockwise.



Who is correct? Why?

- Zoe says, The butterfly has taken quarter turn anticlockwise.



Before	After

