

Fluency

Circle to show whether each sentence is true or false.

- 1 The arrow shows half turn clockwise .




true false

- 2 The ladybird shows quarter turn anticlockwise .



true false

- 3 The flower shows three-quarter turn anticlockwise .



true false



- 4 The butterfly shows full turn clockwise.



true false

Word Problem

- 5 Zain needs to fit the shape in its place.



What turn the shape should make?

- 6 Ava presses a button on her game that turned her parking sign clockwise.

Before turn



After turn


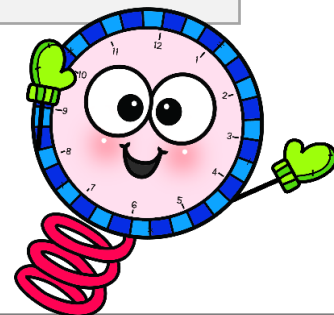


What turn could make the parking sign facing this direction?

Reasoning

- 7 Always, sometimes, never.

If the minute hand takes quarter turn clockwise from 12, it always lands on 3.



I scored out of 7