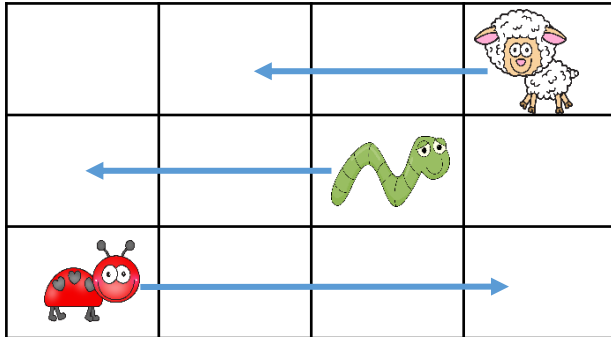





Fluency


- 1 Complete the sentences to describe the movements made. Use the words '**forwards**' and '**backwards**' to describe the movements.



- a) The  moves 2 squares _____
- b) The  moves 2 squares _____
- c) The  moves 2 squares _____

Word Problem

- 5 The pirate wants to reach to the treasure. Record the movements on the grid using arrows.



- 6 Colour the tower according to the instructions given below.

- a) The bottom block is red.
b) The top block is yellow.
c) The block above the red is pink.
d) The block in between yellow and pink is green.



Reasoning

- 7 How many different ways can you describe the position of the circle.

