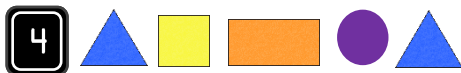

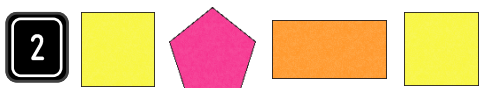


## Fluency

Draw the next shape in the pattern.

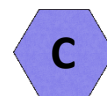
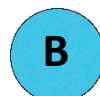


## Word Problem

5 Ali and Sonia are talking about a shape pattern. Use the clues given below to draw the pattern.

1. The first shape is red and it has three sides.
2. The 2<sup>nd</sup> shape is green and it has 4 equal sides.
3. The 3<sup>rd</sup> shape is blue circle.

6 Sort the shapes below by the number of sides from least to most.



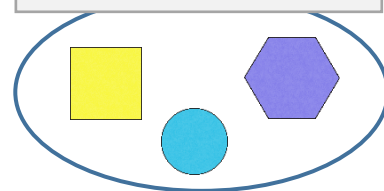
## Reasoning

7 Tim says, "The shapes have been sorted correctly."



Explain Tim's mistake.

4 or more vertices



Less than 4 vertices

