

Fluency

Match each shape to its name.

1 Cube



2 Cuboid




3 Cone



4 Sphere

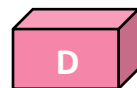


5 Cylinder

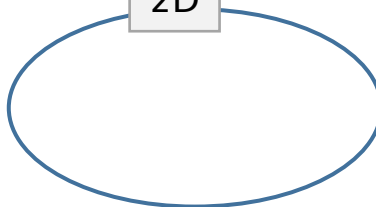


Word Problem

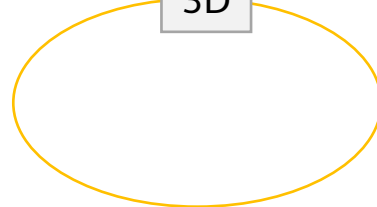
5 Sort the shapes into groups.



2D



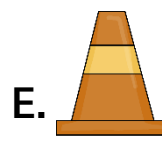


3D




6 Look around the house. Can you find some 3d objects? Write the names.

Reasoning

7 Which shape is the odd one out?



Explain your answer.



I scored out of 7