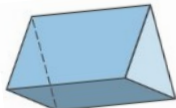


Fluency

Write the number of edges each shape has.

1



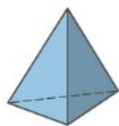
2



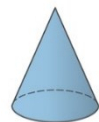
3



4



5



Word Problem

5

Ben and Anna are looking to buy some 3D shapes. Ben wants the shapes that roll. Anna wants the shapes that stack.

Write at least two names in each group that Anna and Ben can buy.

Ben

Anna

6



Which two 3D shapes have same number of edges, vertices and faces.

Write the names.

Reasoning

7

Which shape is the odd one out?



Explain your answer.

