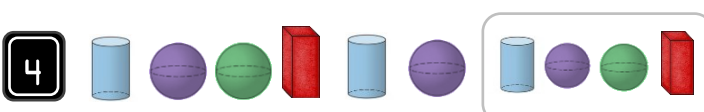
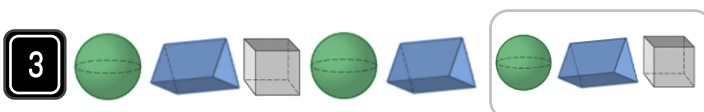
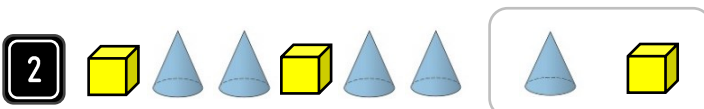


## Fluency

Tick the shape from the box that goes next in the pattern.



## Word Problem

5 The shape below is a shadows of a 3D shape.



Tick the name of the 3D shapes that could cast this shadow.

Cuboid

Cone



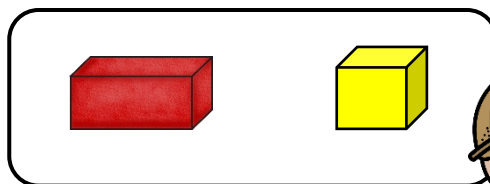
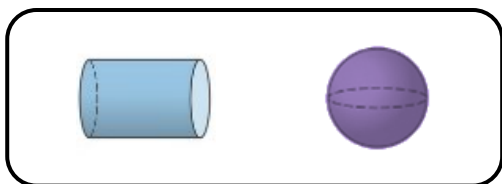
6 I am thinking of a 3D shape. The bottom face of my shape is a circle.

Which shape could it be?



## Reasoning

7 Can you explain how the shapes have been sorted?



I scored  out of 7