
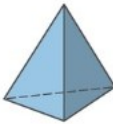




## Fluency

1 Complete the table below

Shapes	Vertices	Edges
		
		
		
		

## Word Problem

5 Jane has a bag full of 3D shapes. She puts her hand in and feels the shape. Jane says "My shape has one curved surface and it has 0 edges."

What 3D shape is Jane holding in her hand?

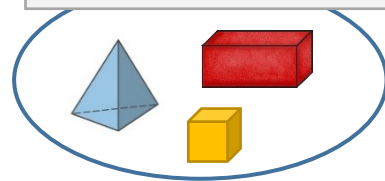
6 Write the name of the 3D shape can print both of these shapes.




## Reasoning

7 Ava has sorted some shapes into two groups.  
What other ways can Ava sort the shapes?

4 or more vertices



Less than 4 vertices



I scored  out of 7