

## Fluency



Complete the sentence using hours, minutes and seconds.

- 1 It takes 7 \_\_\_\_\_ to finish a sandwich.
- 2 It takes 5 \_\_\_\_\_ to wave a hand.
- 3 There are 24 \_\_\_\_\_ in a day.
- 4 The school day last for 6 \_\_\_\_\_.

## Word Problem

- 5 On Monday, I walked to school. It takes me ten minutes. On Tuesday, I walked faster. Did it take less time or more time?  
How many minutes it might have taken me?

- 6 Compare the events below. Order them from the longest amount of time to the shortest amount of time.




## Reasoning

- 7 Sam says, I came 1<sup>st</sup> in the race.



Can you Spot Sam's mistake?

Name	Time
Sam	40 seconds
Ali	1 minute
Jane	30 seconds



I scored  out of 7