

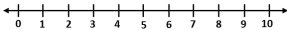
Fluency

1 Quick subtraction:

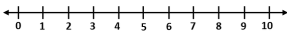
a. $4 - 2 =$

b. $9 - 5 =$

2 Use number line to solve this:



a. $6 - 2 =$




b. $8 - 4 =$

Word Problem

3 There were 9 cookies on a rack. Tom ate 4 cookies. How many cookies are left?

- =



4 Lisa had 10 stickers. She gave away some. Now she has 3 left. How many did she give away?



$10 -$ $= 3$

Reasoning

5 True or False?

Sam says, "To find $10 - 8$, I can think: $8 + ? = 10$ ".

$8 +$ $= 10$ So, $10 - 8 =$

