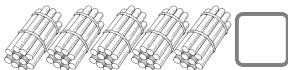
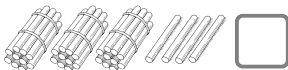


Fluency

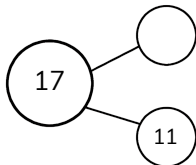
1 Double Facts:

a. $10 + 10 =$

b. $23 + 23 =$

2 How many straws are there:


Word Problem

3 Complete the part-whole model for 17:


$11 +$ $= 17$

$17 - 11 =$

4 A little frog starts at 26 on the number line. He makes three jumps of 3s. Which number does he land on?


Reasoning

5 You know $20 + 20 = 40$. If you add 1 to the first 20 and take 1 away from the second 20, what happens to the total? Explain why.
