


Fluency

1 Match the money to its total.



£25



£45



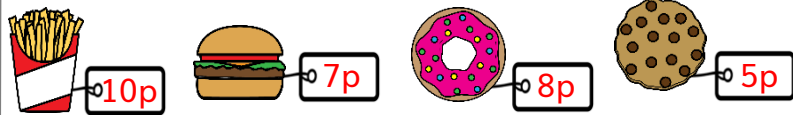
£6



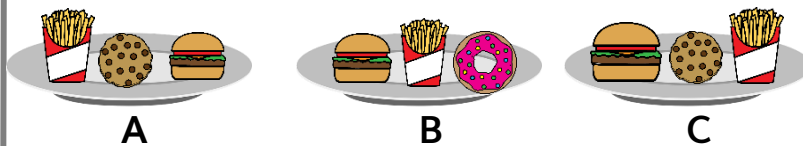
£31

Word Problem

2 Ben bought lunch that costs exactly 25p.



Tick the lunch he chose.



3 Jiya bought a candy for 65p. She has these coins in her bag.




Circle the coins she could use to pay exactly 65p.

Reasoning

4 Ava has sorted some coins into two groups.

What other ways can Ava sort the coins?

bronze



silver

