

## Fluency

Complete the part whole model.

1

£   p

2





£   p

3

£   p

## Word Problem

4 Look at the grocery list. Answer the questions.

Item	Price
 syrup	45p
 Milk	27p
 Cereal	50p
 Jam	33p

- a) Jane spent £1 on two of the same products, which 2 items did she buy?
- a) Zoe bought milk and jam. She gave 70p to the shopkeeper. How much change did she get?
- b) Joe has three 20p coins. Which two items cost exactly the same amount that Joe has?

## Reasoning

5 Kinza has the following coins.



She thinks she has £52. Explain her mistake.

